

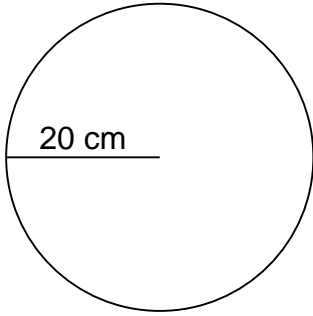
Name: _____

Class: _____

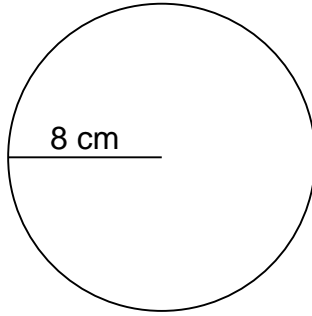
CIRCUMFERENCE AND AREA

Calculate the circumference and area of each circle.

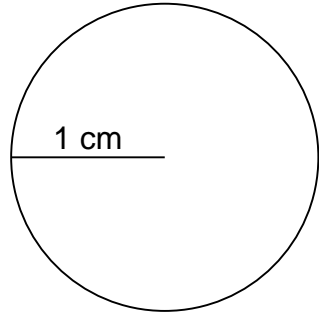
1.



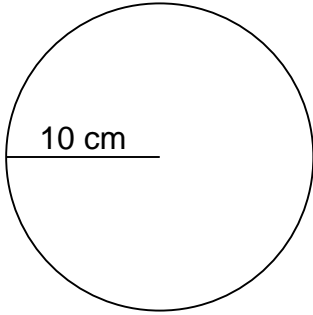
2.



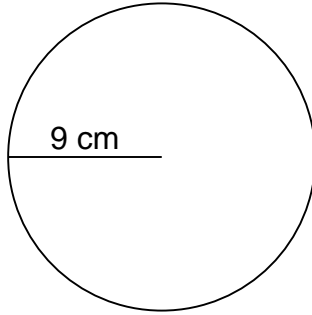
3.



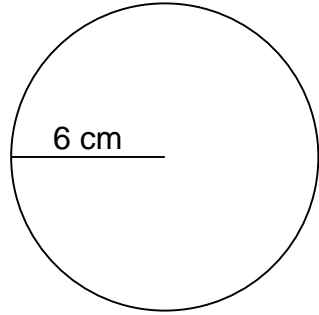
4.



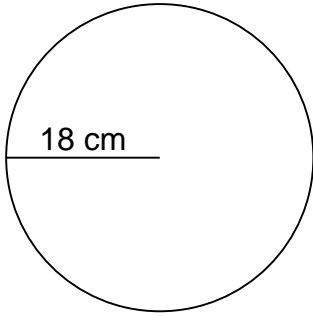
5.



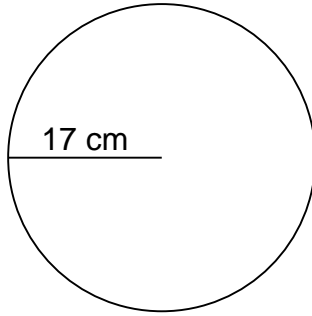
6.



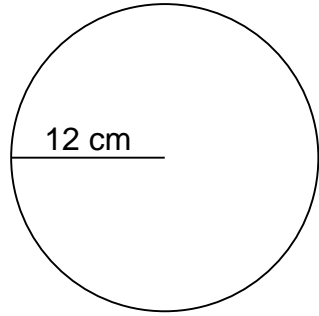
7.



8.



9.



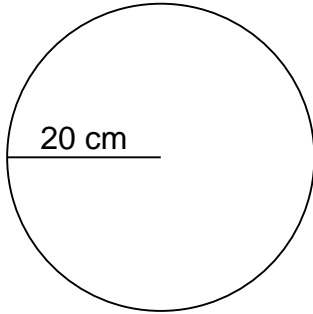
Name: _____

Class: _____

CIRCUMFERENCE AND AREA

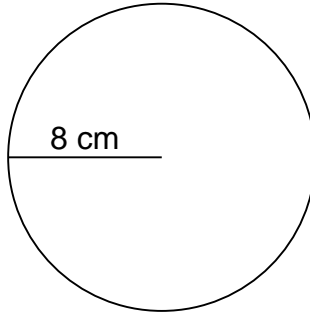
Calculate the circumference and area of each circle.

1.



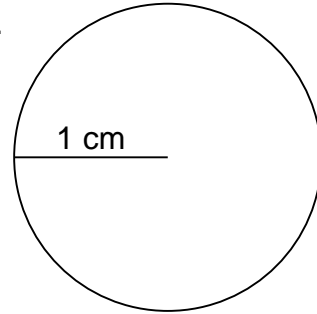
$$\begin{aligned} C &= 125.60 \text{ cm} \\ A &= 1,256.00 \text{ cm}^2 \end{aligned}$$

2.



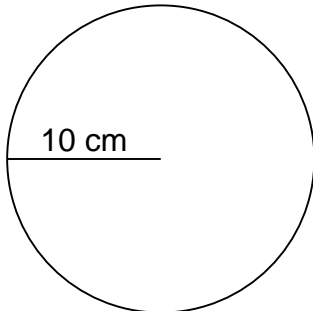
$$\begin{aligned} C &= 50.24 \text{ cm} \\ A &= 200.96 \text{ cm}^2 \end{aligned}$$

3.



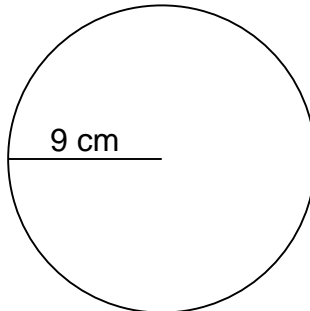
$$\begin{aligned} C &= 6.28 \text{ cm} \\ A &= 3.14 \text{ cm}^2 \end{aligned}$$

4.



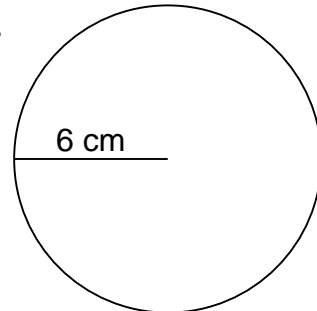
$$\begin{aligned} C &= 62.80 \text{ cm} \\ A &= 314.00 \text{ cm}^2 \end{aligned}$$

5.



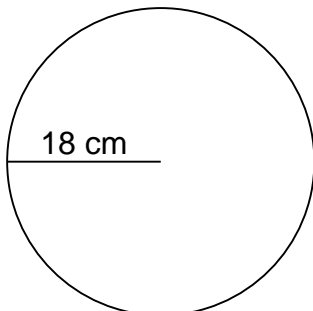
$$\begin{aligned} C &= 56.52 \text{ cm} \\ A &= 254.34 \text{ cm}^2 \end{aligned}$$

6.



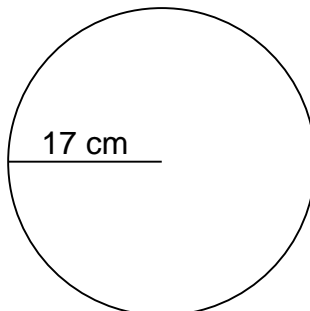
$$\begin{aligned} C &= 37.68 \text{ cm} \\ A &= 113.04 \text{ cm}^2 \end{aligned}$$

7.



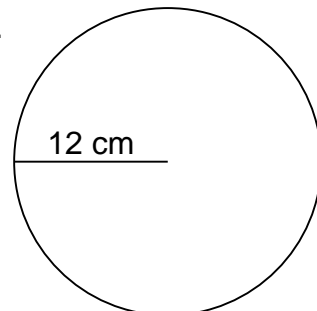
$$\begin{aligned} C &= 113.04 \text{ cm} \\ A &= 1,017.36 \text{ cm}^2 \end{aligned}$$

8.



$$\begin{aligned} C &= 106.76 \text{ cm} \\ A &= 907.46 \text{ cm}^2 \end{aligned}$$

9.



$$\begin{aligned} C &= 75.36 \text{ cm} \\ A &= 452.16 \text{ cm}^2 \end{aligned}$$