

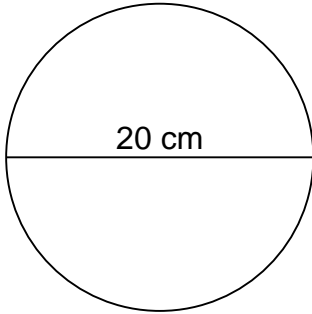
Name: \_\_\_\_\_

Class: \_\_\_\_\_

## CIRCUMFERENCE AND AREA

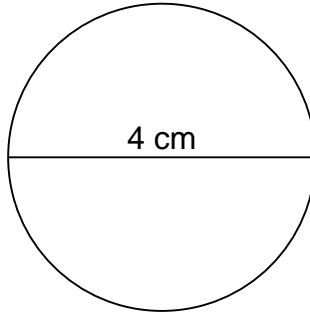
Calculate the circumference and area of each circle.

1.



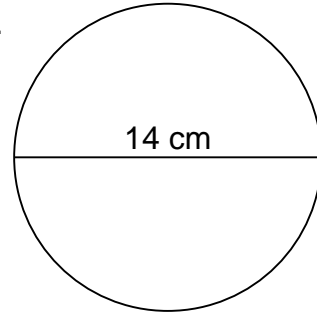
\_\_\_\_\_  
\_\_\_\_\_

2.



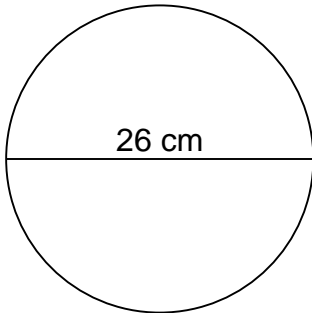
\_\_\_\_\_  
\_\_\_\_\_

3.



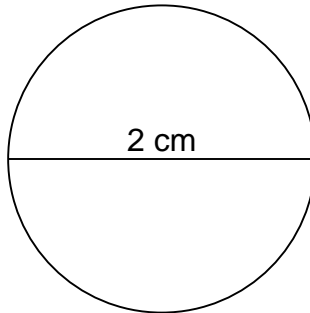
\_\_\_\_\_  
\_\_\_\_\_

4.



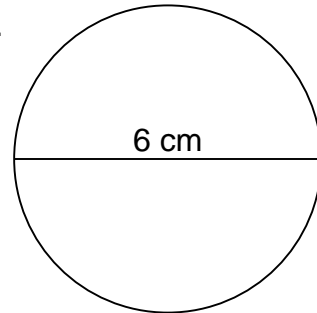
\_\_\_\_\_  
\_\_\_\_\_

5.



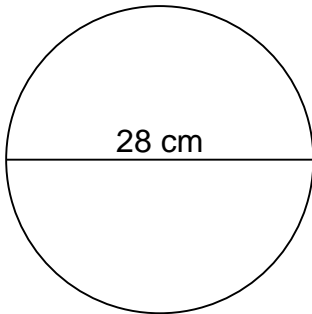
\_\_\_\_\_  
\_\_\_\_\_

6.



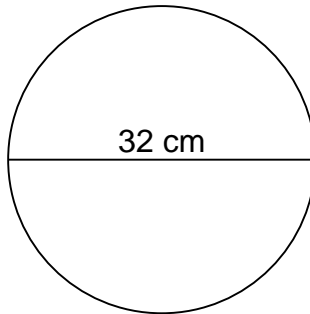
\_\_\_\_\_  
\_\_\_\_\_

7.



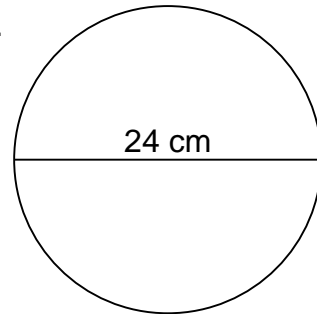
\_\_\_\_\_  
\_\_\_\_\_

8.



\_\_\_\_\_  
\_\_\_\_\_

9.



\_\_\_\_\_  
\_\_\_\_\_

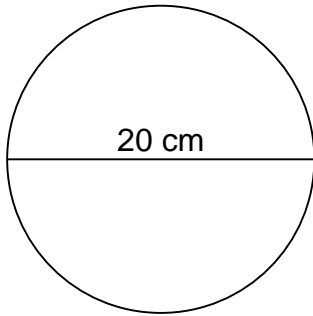
Name: \_\_\_\_\_

Class: \_\_\_\_\_

## CIRCUMFERENCE AND AREA

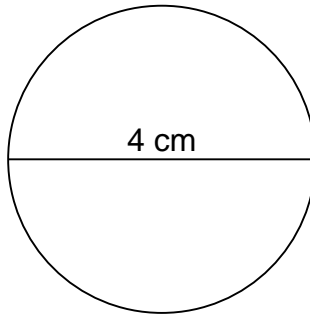
Calculate the circumference and area of each circle.

1.



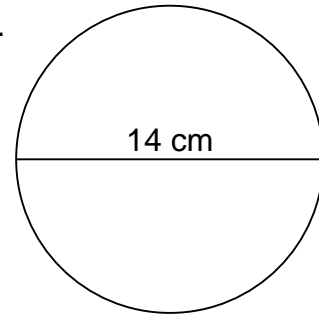
$$\begin{aligned} C &= 62.80 \text{ cm} \\ A &= 314.00 \text{ cm}^2 \end{aligned}$$

2.



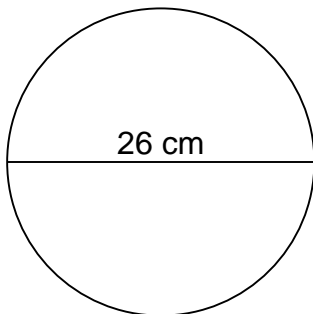
$$\begin{aligned} C &= 12.56 \text{ cm} \\ A &= 12.56 \text{ cm}^2 \end{aligned}$$

3.



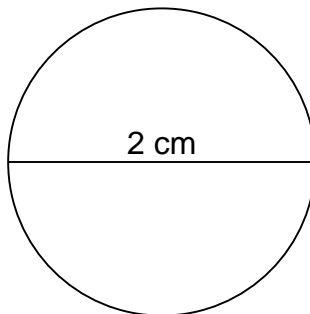
$$\begin{aligned} C &= 43.96 \text{ cm} \\ A &= 153.86 \text{ cm}^2 \end{aligned}$$

4.



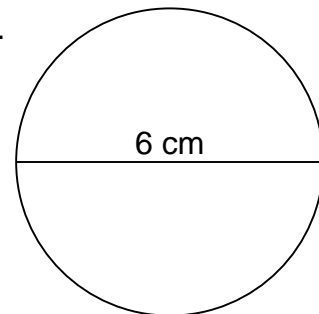
$$\begin{aligned} C &= 81.64 \text{ cm} \\ A &= 530.66 \text{ cm}^2 \end{aligned}$$

5.



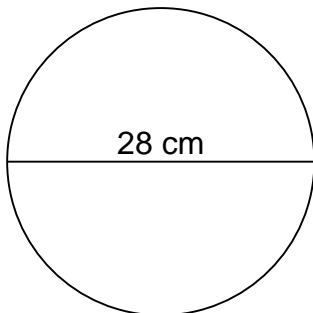
$$\begin{aligned} C &= 6.28 \text{ cm} \\ A &= 3.14 \text{ cm}^2 \end{aligned}$$

6.



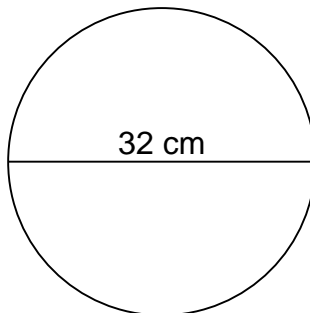
$$\begin{aligned} C &= 18.84 \text{ cm} \\ A &= 28.26 \text{ cm}^2 \end{aligned}$$

7.



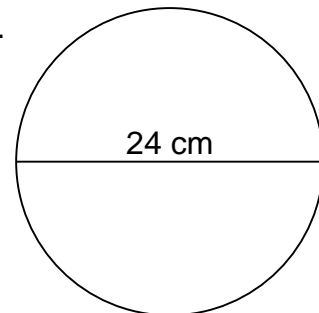
$$\begin{aligned} C &= 87.92 \text{ cm} \\ A &= 615.44 \text{ cm}^2 \end{aligned}$$

8.



$$\begin{aligned} C &= 100.48 \text{ cm} \\ A &= 803.84 \text{ cm}^2 \end{aligned}$$

9.



$$\begin{aligned} C &= 75.36 \text{ cm} \\ A &= 452.16 \text{ cm}^2 \end{aligned}$$