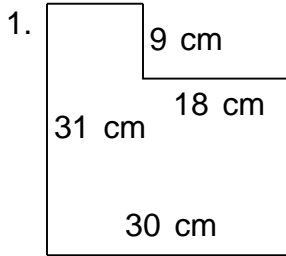


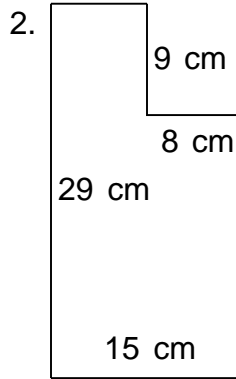
Name: _____

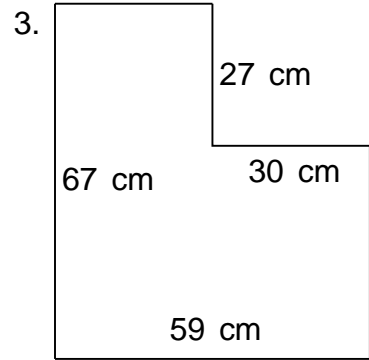
Class: _____

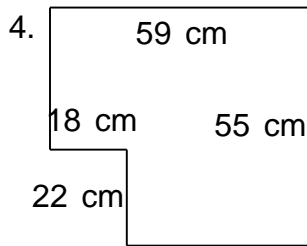
PERIMETER AND AREA

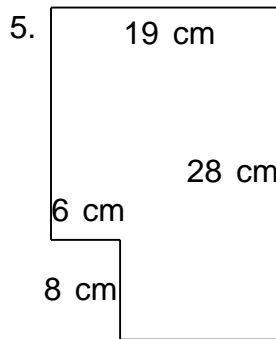
Find the perimeter and area.

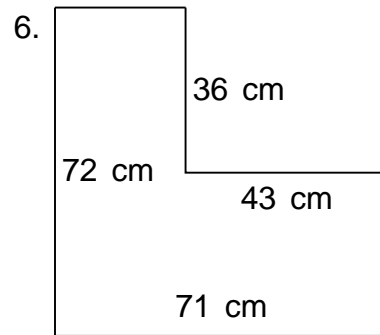


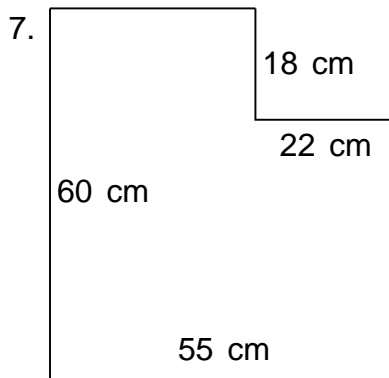


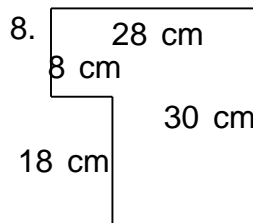


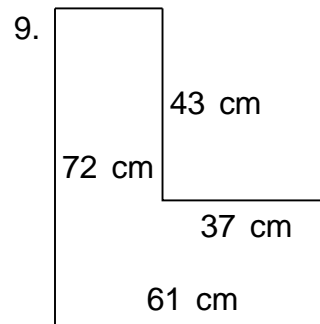










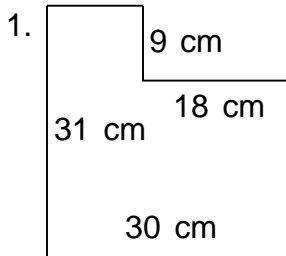


Name:

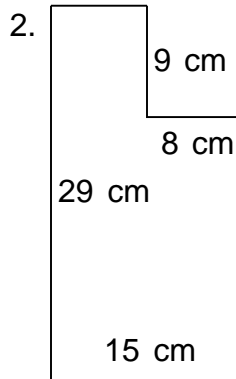
Class:

PERIMETER AND AREA

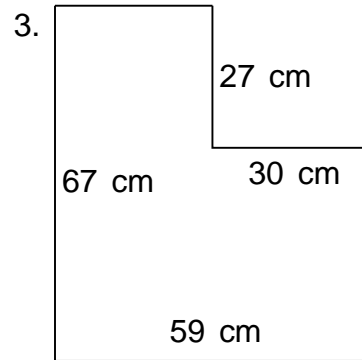
Find the perimeter and area.



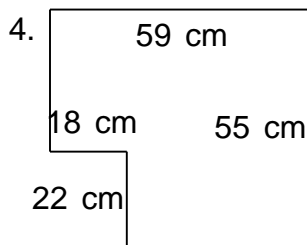
$P = 122 \text{ cm}$ $A = 768 \text{ cm}^2$



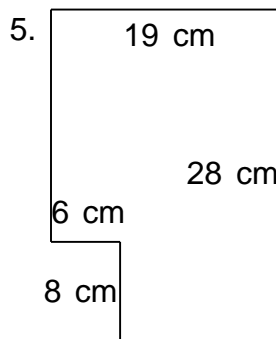
$P = 88 \text{ cm}$ $A = 363 \text{ cm}^2$



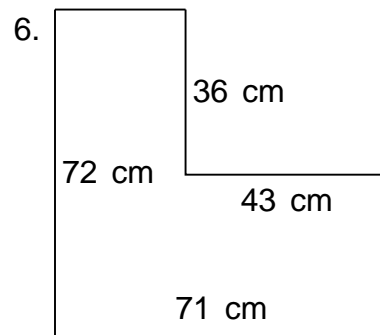
$P = 252 \text{ cm}$ $A = 3,143 \text{ cm}^2$



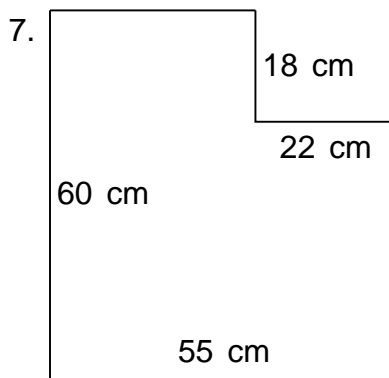
$P = 228 \text{ cm}$ $A = 2,849 \text{ cm}^2$



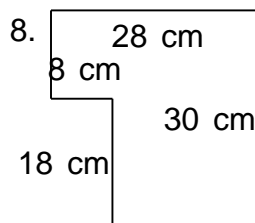
$P = 94 \text{ cm}$ $A = 484 \text{ cm}^2$



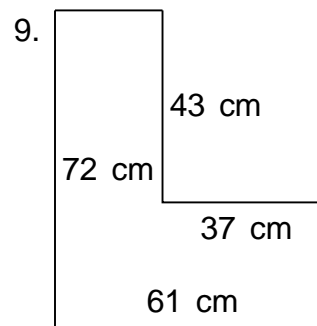
$P = 286 \text{ cm}$ $A = 3,564 \text{ cm}^2$



$P = 230 \text{ cm}$ $A = 2,904 \text{ cm}^2$



$P = 116 \text{ cm}$ $A = 696 \text{ cm}^2$



$P = 266 \text{ cm}$ $A = 2,801 \text{ cm}^2$