




Name \_\_\_\_\_


Date \_\_\_\_\_

### Measure the Perimeter of a Square




5cm

Perimeter = \_\_\_\_\_




4cm

Perimeter = \_\_\_\_\_



7cm

Perimeter = \_\_\_\_\_



3cm

Perimeter Area = \_\_\_\_\_

Grade






Name \_\_\_\_\_


Date \_\_\_\_\_

## Measure the Perimeter of a Square




7.0 cm

Perimeter = \_\_\_\_\_




6.0 cm

Perimeter = \_\_\_\_\_



4.5 cm

Perimeter = \_\_\_\_\_



2.5 cm

Perimeter = \_\_\_\_\_

Grade






Name \_\_\_\_\_

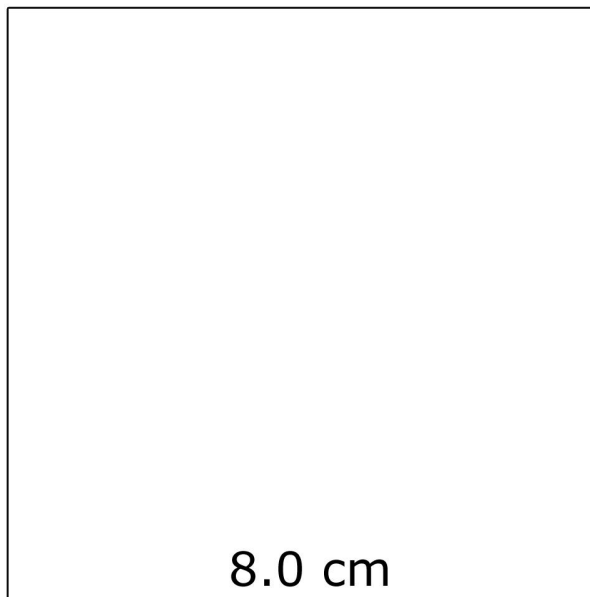
Date \_\_\_\_\_

## Measure the Perimeter of a Square



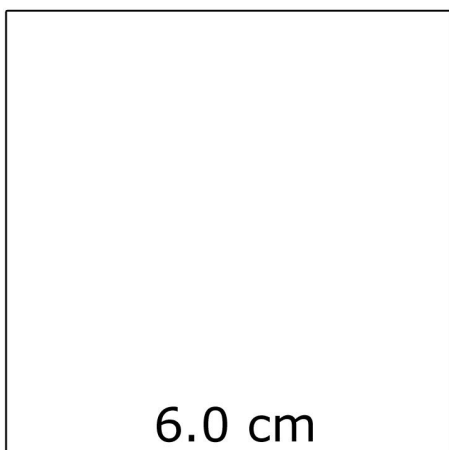
7.5 cm

Perimeter = \_\_\_\_\_



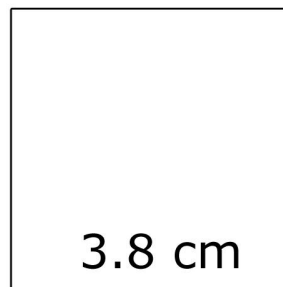
8.0 cm

Perimeter = \_\_\_\_\_



6.0 cm

Perimeter = \_\_\_\_\_



3.8 cm

Perimeter = \_\_\_\_\_

Grade






Name \_\_\_\_\_


Date \_\_\_\_\_

## Measure the Perimeter of a Square




1.5 cm

Perimeter = \_\_\_\_\_




5.0 cm

Perimeter = \_\_\_\_\_



6.5 cm

Perimeter = \_\_\_\_\_



4.8 cm

Perimeter = \_\_\_\_\_

Grade






Name \_\_\_\_\_


Date \_\_\_\_\_

## Measure the Perimeter of a Square




8.0 cm

Perimeter = \_\_\_\_\_




4.0 cm

Perimeter = \_\_\_\_\_



5.0 cm

Perimeter = \_\_\_\_\_



3.2 cm

Perimeter = \_\_\_\_\_

Grade

