



Name: \_\_\_\_\_ Class: \_\_\_\_\_

## Addition


Find the sum of the numbers below by counting the number of items displayed.



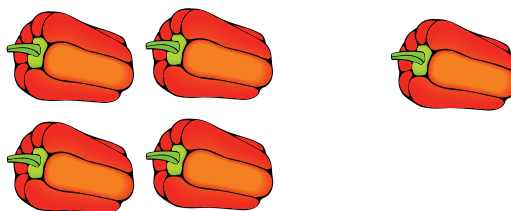
1.  $6 + 1 =$



2.  $7 + 1 =$




3.  $8 + 1 =$



4.  $4 + 1 =$



5.  $5 + 1 =$



6.  $9 + 1 =$