


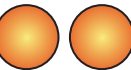
Name: _____ Class: _____

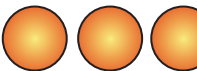

Subtraction

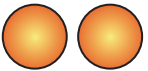
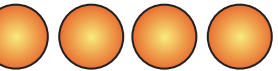
Solve the problem and select the correct answer.

1.

$$3 + 3 =$$



 + 



 + 



 + 

2.

$$4 + 1 =$$



 + 



 + 



 + 

3.

$$5 + 2 =$$


 + 



 + 



 + 

4.

$$3 + 0 =$$



 +



 + 



 + 

5.

$$2 + 2 =$$



 + 



 + 


 + 

6.

$$6 + 1 =$$

 + 

 + 

 + 