





Name: \_\_\_\_\_ Class: \_\_\_\_\_

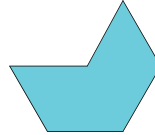


### Classification exercise

Find similar shapes to those on the left below and tick.



1.





2.



3.



4.



5.

