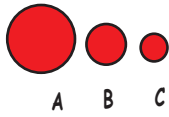


Name: _____ Class: _____

Comparison of lengths, sizes and heights

Compare the items below and tick the correct answer.



Size

Which circle is the largest?


A ☐ B ☐ C ☐



Size

Which leaf is the largest?

A ☐ B ☐ C ☐



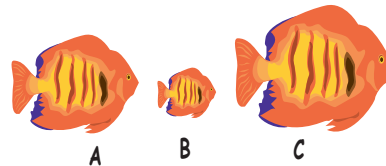
Height

Which flower is the tallest?

A ☐ B ☐ C ☐

Which flower is the shortest?

A ☐ B ☐ C ☐



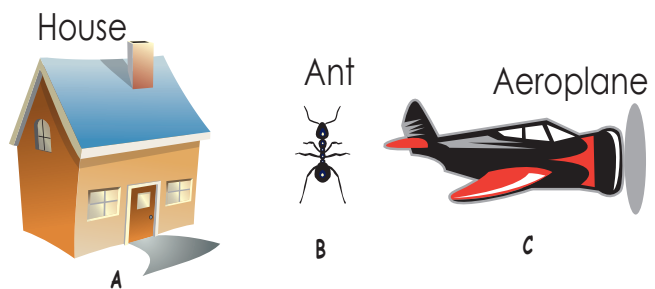
Size

Which fish is the smallest?

A ☐ B ☐ C ☐

Which fish is the largest?

A ☐ B ☐ C ☐



House

Ant

Aeroplane

Which object is the heaviest?

A ☐ B ☐ C ☐

Which object is the lightest?

A ☐ B ☐ C ☐