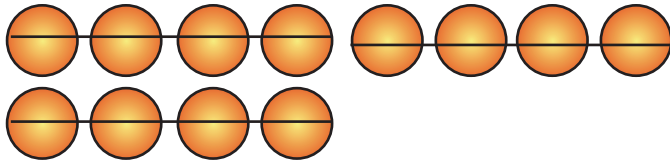


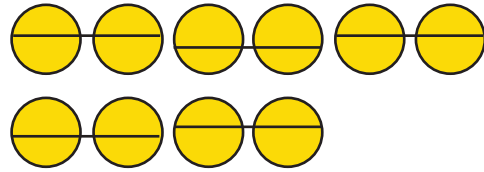
Name: _____ Class: _____

Division



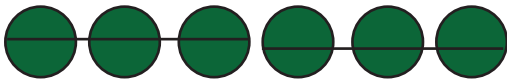
12 divided by 4 =

1.




10 divided by 2 =

2.



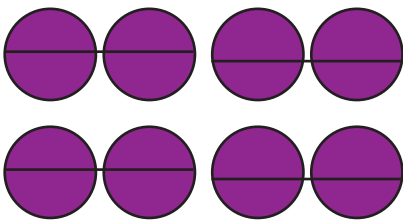
6 divided by 3 =

3.



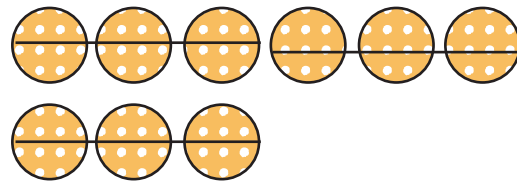
16 divided by 4 =

4.



8 divided by 2 =

5.



9 divided by 3 =

6.