


Name: _____ Class: _____

Fractions

1.



What fraction does  represent ?

2.




What fraction do  represent ?

3.




What fraction do  represent ?

4.




What fraction does  represent ?

5.



What fraction do  represent ?

6.



What fraction does  represent ?
