

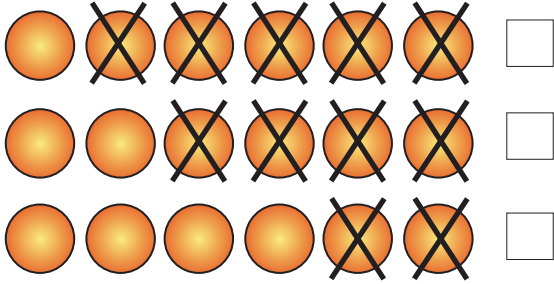
Name: _____ Class: _____

Subtraction

Solve the problem and tick the picture that represents it.

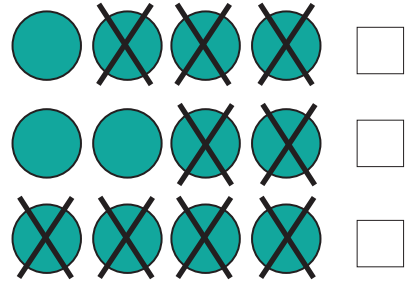
1.

$$6 - 4 =$$



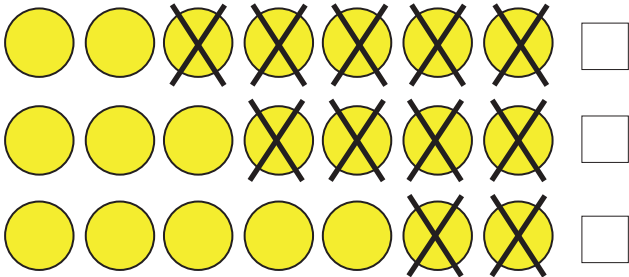
2.

$$4 - 4 =$$



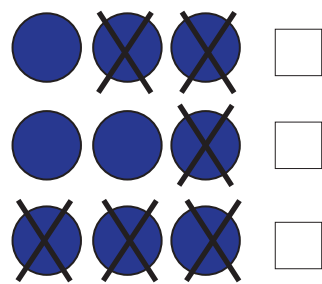
3.

$$7 - 5 =$$



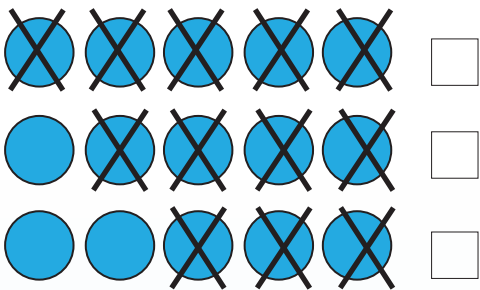
4.

$$3 - 1 =$$



5.

$$5 - 3 =$$



6.

$$8 - 2 =$$

